



Determine which letter best represents the sum.

1) $\frac{2}{10} + \frac{7}{10}$

3) $\frac{5}{6} + \frac{4}{6}$

5) $\frac{3}{4} + \frac{2}{4}$

7) $\frac{1}{2} + \frac{1}{2}$

9) $\frac{2}{5} + \frac{4}{5}$

11) $\frac{4}{8} + \frac{2}{8}$

13) $\frac{9}{12} + \frac{2}{12}$

2) $\frac{4}{8} + \frac{1}{8}$

4) $\frac{9}{10} + \frac{7}{10}$

6) $\frac{1}{3} + \frac{1}{3}$

8) $\frac{3}{5} + \frac{2}{5}$

10) $\frac{4}{6} + \frac{2}{6}$

12) $\frac{2}{3} + \frac{1}{3}$

14) $\frac{1}{5} + \frac{2}{5}$

Answers

1. _____

2. _____

3. _____

4. _____

5. _____

6. _____

7. _____

8. _____

9. _____

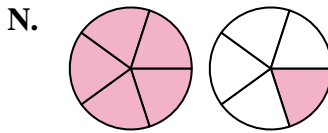
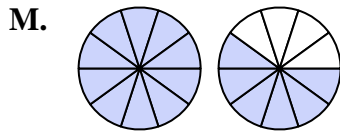
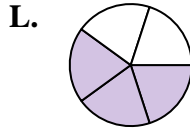
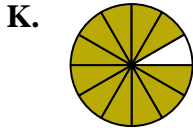
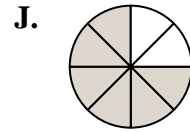
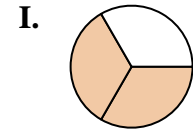
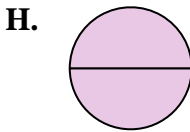
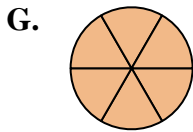
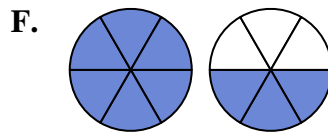
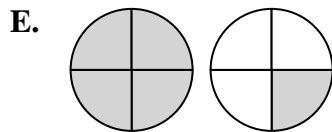
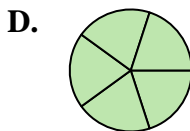
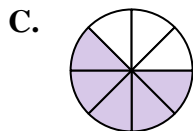
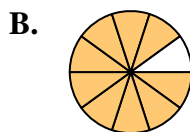
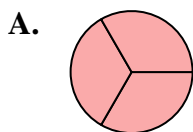
10. _____

11. _____

12. _____

13. _____

14. _____





Determine which letter best represents the sum.

1) $\frac{2}{10} + \frac{7}{10}$

2) $\frac{4}{8} + \frac{1}{8}$

3) $\frac{5}{6} + \frac{4}{6}$

4) $\frac{9}{10} + \frac{7}{10}$

5) $\frac{3}{4} + \frac{2}{4}$

6) $\frac{1}{3} + \frac{1}{3}$

7) $\frac{1}{2} + \frac{1}{2}$

8) $\frac{3}{5} + \frac{2}{5}$

9) $\frac{2}{5} + \frac{4}{5}$

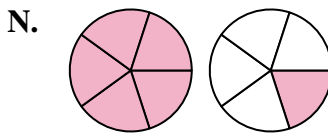
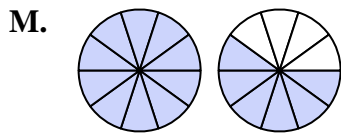
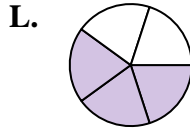
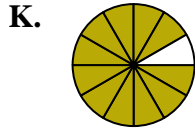
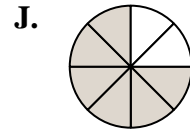
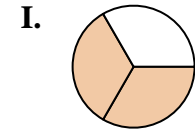
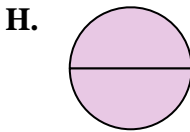
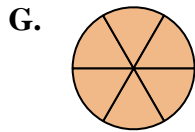
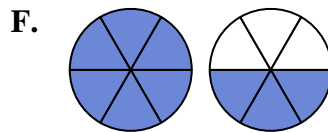
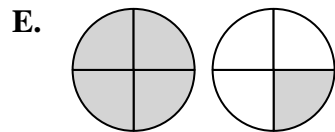
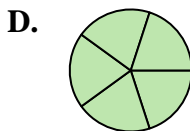
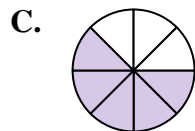
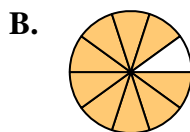
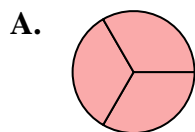
10) $\frac{4}{6} + \frac{2}{6}$

11) $\frac{4}{8} + \frac{2}{8}$

12) $\frac{2}{3} + \frac{1}{3}$

13) $\frac{9}{12} + \frac{2}{12}$

14) $\frac{1}{5} + \frac{2}{5}$



Answers

1. **B** $\frac{9}{10}$

2. **C** $\frac{5}{8}$

3. **F** $1\frac{3}{6}$

4. **M** $1\frac{6}{10}$

5. **E** $1\frac{1}{4}$

6. **I** $\frac{2}{3}$

7. **H** $\frac{2}{2}$

8. **D** $\frac{5}{5}$

9. **N** $1\frac{1}{5}$

10. **G** $\frac{6}{6}$

11. **J** $\frac{6}{8}$

12. **A** $\frac{3}{3}$

13. **K** $\frac{11}{12}$

14. **L** $\frac{3}{5}$